



UNIVERSITY OF CAMBRIDGE INTERNATIONAL EXAMINATIONS
General Certificate of Education Advanced Subsidiary Level and Advanced Level

GEOGRAPHY

9696/11

Paper 1 Core Geography

May/June 2013

INSERT

3 hours

READ THESE INSTRUCTIONS FIRST

This Insert contains all the Figures and the Table referred to in the questions.

Question 5 Fig. 5a Content removed due to copyright restrictions.

This document consists of **8** printed pages.



Fig. 1A for Question 1

Two river catchments

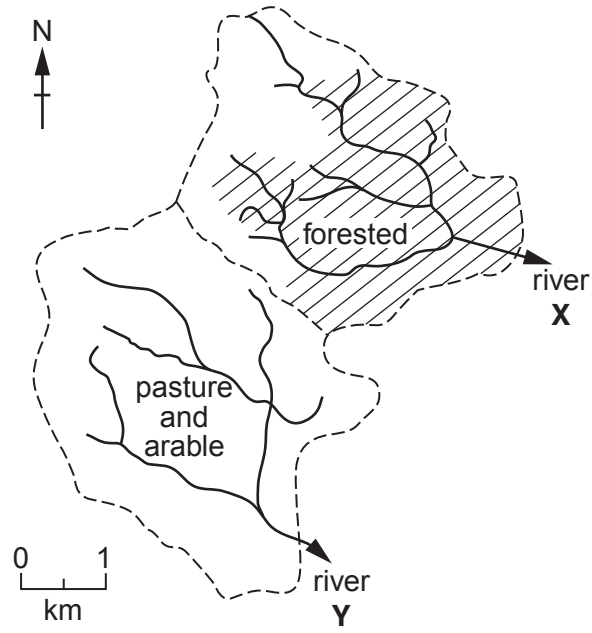


Fig. 1B for Question 1

Rainfall event

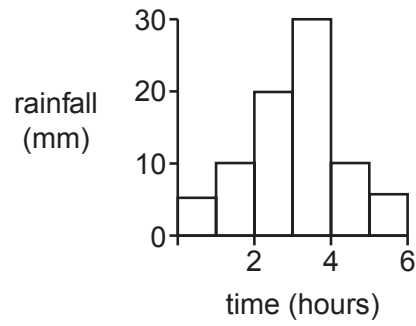


Fig. 2 for Question 2

Mean (average) temperatures (°C) in July

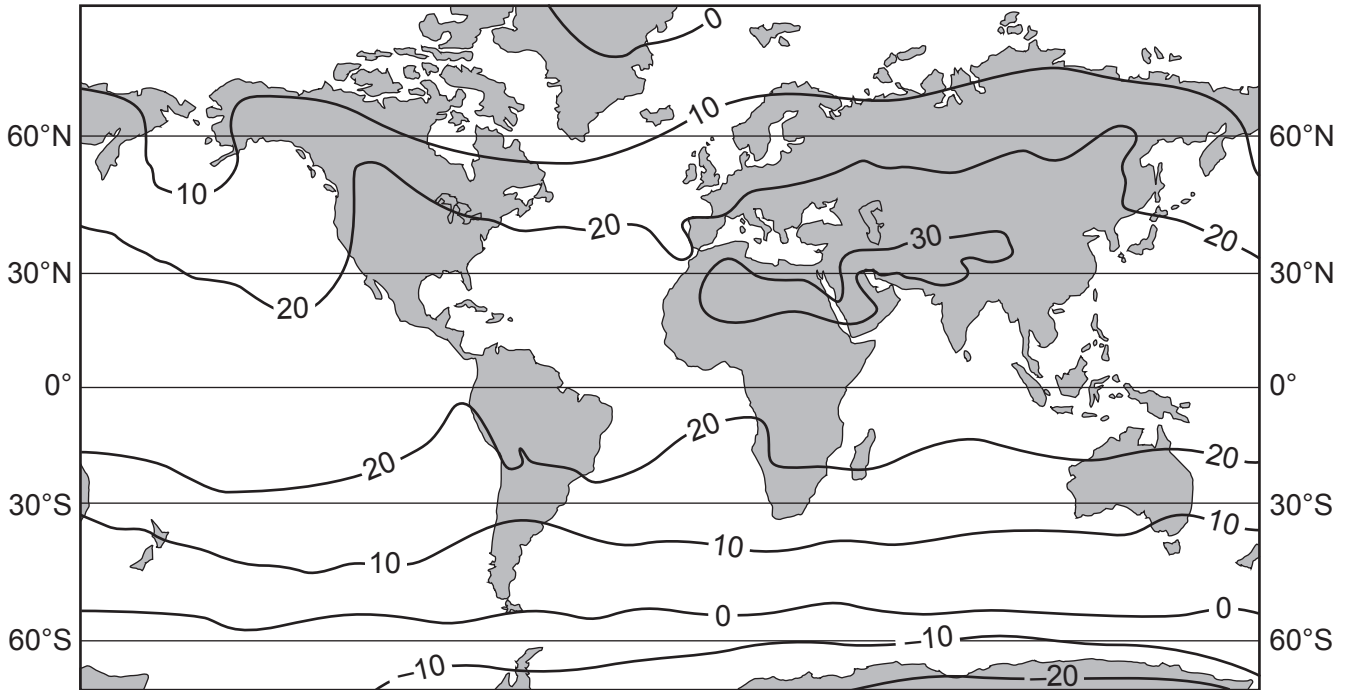


Fig. 3 for Question 3

A plate boundary

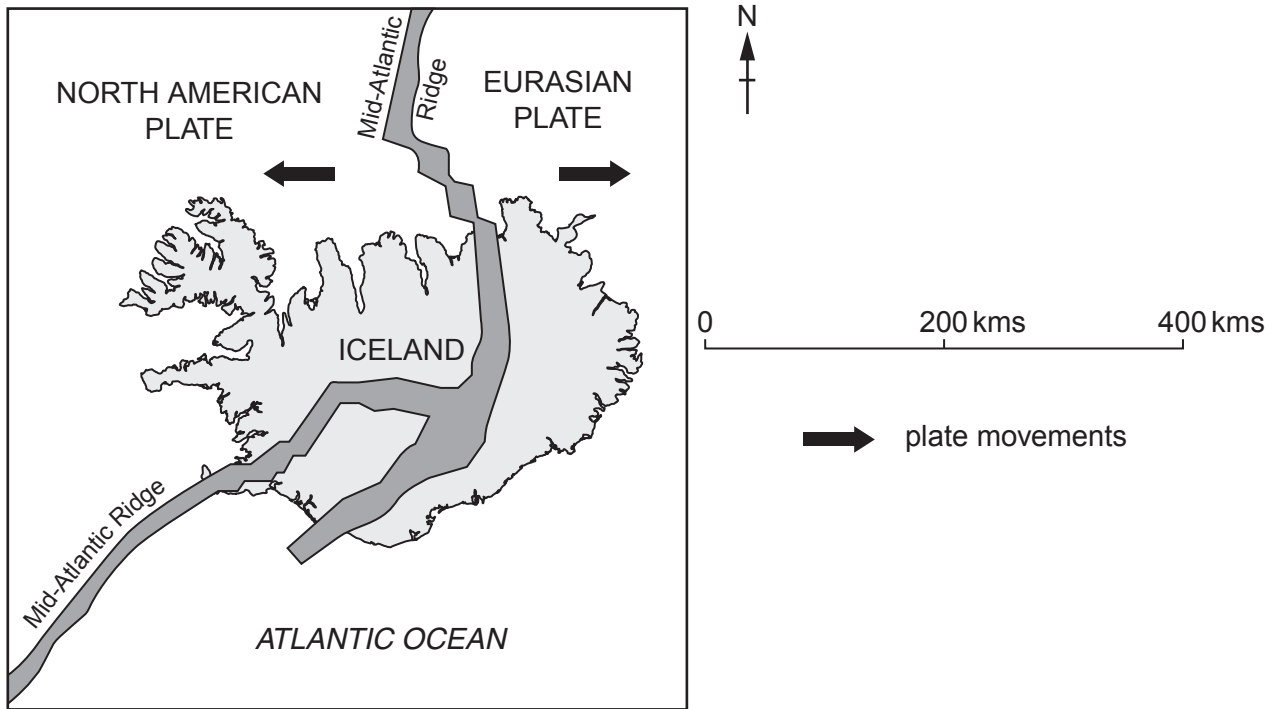
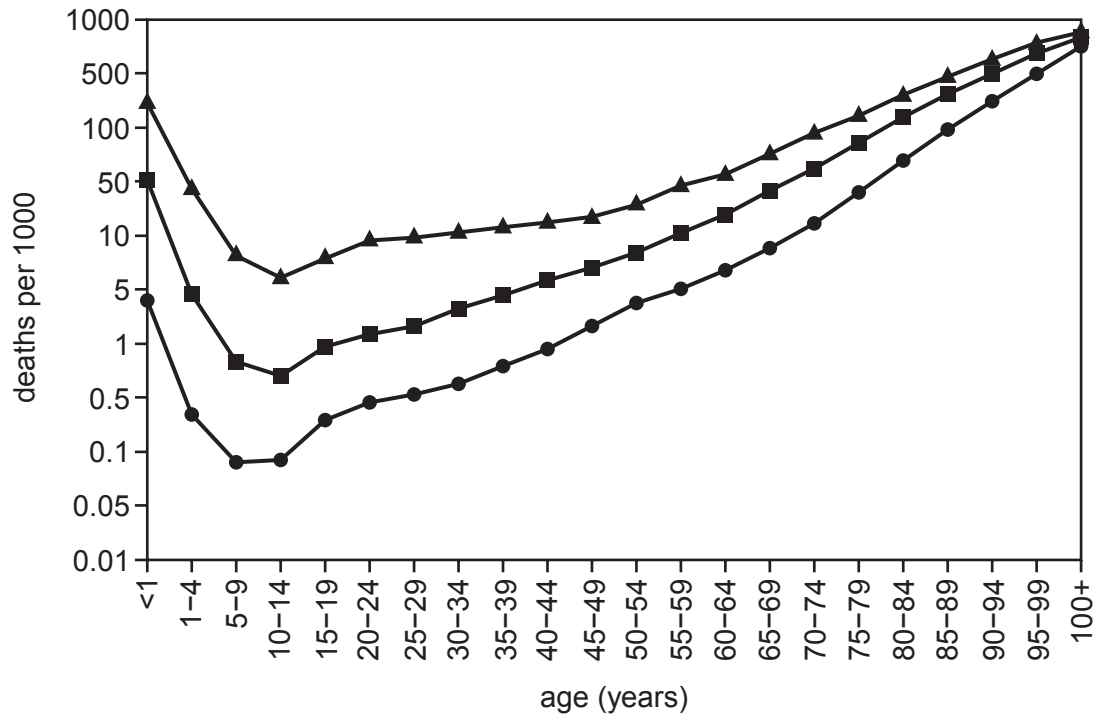


Fig. 4 for Question 4

Age-specific death rates for three countries, 2004



Key

- ▲ Afghanistan (LEDC)
- Guatemala (LEDC)
- Japan (MEDC)

Fig. 5B for Question 5

The countries of North and South America



Table 1 for Question 6

City development index (CDI), 2008

Cities in	CDI	City housing	City infrastructure	City waste	City health	City education
Latin America and the Caribbean	66.3	62.9	70.4	39.5	82.7	75.7
Africa	42.9	49.7	36.2	26.0	50.4	52.0
Asia-Pacific	65.4	62.9	67.8	44.4	78.3	73.4
MEDCs	96.2	90.6	99.2	100.0	94.3	97.1

CDI is the UN Settlement Program's indicator of the development of cities. It is an average of the scores for the five components shown. A score of 100 indicates that a city is highly developed.