

CANDIDATE
NAME


--

CENTRE
NUMBER

--	--	--	--	--

CANDIDATE
NUMBER

--	--	--	--



COMPUTER SCIENCE

2210/12

Paper 1 Theory

May/June 2015

1 hour 45 minutes

Candidates answer on the Question Paper.

No Additional Materials are required.

No calculators allowed.

READ THESE INSTRUCTIONS FIRST

Write your Centre number, candidate number and name in the spaces at the top of this page.

Write in dark blue or black pen.

You may use an HB pencil for any diagrams, graphs or rough working.

Do not use staples, paper clips, glue or correction fluid.

DO NOT WRITE IN ANY BARCODES.

Answer **all** questions.

No marks will be awarded for using brand names of software packages or hardware.

At the end of the examination, fasten all your work securely together.

The number of marks is given in brackets [] at the end of each question or part question.

The maximum number of marks is 75.

This document consists of **14** printed pages and **2** blank pages.

- 1 (a) Four statements about cookies are shown in the table below.

Study each statement.

Tick (✓) to show whether the statement is true or false.

Statement	True	False
they are a form of spyware		
they are used only in advertising		
they are used to track browser use		
they act in the same way as a virus		

[4]

- (b) Five descriptions and five security issues are shown below.

Draw a line to connect each description to the correct security issue.

Description

Security issue

malicious code installed on the hard drive of a user's computer or on the web server; this code will re-direct user to a fake web site without their consent

hacking

software that gathers information by monitoring key presses on a user's computer and relays the information back to the person who sent the software

pharming

program or code that replicates itself and is designed to amend, delete or copy data and files on a user's computer without their consent

phishing

the act of gaining illegal access to a computer system without the owner's consent

spyware

creator of code sends out a legitimate-looking email in the hope of gathering personal and financial data; it requires the recipient to follow a link in the email or open an attachment

virus

[4]

2 The majority of mobile phones use touch screens. Three common technologies are used by different mobile phone manufacturers.

Choose one of the following mobile phone technologies:

- resistive
- capacitive
- infrared

Chosen technology

(i) Describe how your chosen technology works to allow a user to make selections by touching the screen.

.....
.....
.....
.....
.....[2]

(ii) Give **one** benefit and **one** drawback of your chosen technology when used on mobile phone touch screens.

Benefit

.....
.....

Drawback

.....
.....[2]

3 Four input devices, four descriptions and four applications are shown below.

Draw a line to connect each input device to its correct description. Then connect each description to its correct application.

Input device	Description	Application
barcode reader	copies paper documents and converts the text and pictures into a computer-readable form	voice recognition
microphone	reads labels containing parallel dark and light lines using laser light or LEDs; the width of each line represents a binary code	reading passports
pH sensor	detects changes in acidity levels; data is often in analogue form	automatic stock control
scanner	device that allows audio signals to be converted into electric signals; these can be interpreted by a computer after being converted into digital form	monitor soil in a greenhouse

[6]

- 4 (a) State what is meant by the term SSL.

.....

.....

.....[1]

- (b) The following stages take place when a user wishes to access a secure website.

Put each stage in sequence by writing the numbers 1 to 6 in the column on the right. The first one has been done for you.

Stage	Sequence number
the encrypted data is then shared securely between the web browser and the web server	
the web browser attempts to connect to a website which is secured by SSL	1
the web server sends the web browser a copy of its SSL certificate	
the web browser requests the web server to identify itself	
the web server will then send back some form of acknowledgement to allow the SSL encrypted session to begin	
the web browser checks whether the SSL certificate is trustworthy; if it is, then the web browser sends a message back to the web server	

[5]

5 Parity checks are often used to check for errors that may occur during data transmission.

(a) A system uses **even parity**.

Tick (✓) to show whether the following three bytes have been transmitted correctly or incorrectly.

Received byte	Byte transmitted correctly	Byte transmitted incorrectly
1 1 0 0 1 0 0 0		
0 1 1 1 1 1 0 0		
0 1 1 0 1 0 0 1		

[3]

(b) A parity byte is used to identify which bit has been transmitted incorrectly in a block of data.

The word “F L O W C H A R T” was transmitted using nine bytes of data (one byte per character). A tenth byte, the parity byte, was also transmitted.

The following block of data shows all ten bytes received after transmission. The system uses **even parity** and column 1 is the parity bit.

	letter	column 1	column 2	column 3	column 4	column 5	column 6	column 7	column 8
byte 1	F	1	0	1	0	0	1	1	0
byte 2	L	1	0	1	0	1	1	0	0
byte 3	O	1	0	1	0	1	1	1	1
byte 4	W	1	0	1	1	0	1	1	1
byte 5	C	1	0	1	0	0	0	1	1
byte 6	H	0	0	1	0	1	0	0	0
byte 7	A	0	0	1	0	0	1	0	1
byte 8	R	1	0	1	1	0	0	1	0
byte 9	T	1	0	1	1	0	1	0	0
parity byte		1	0	1	1	1	1	1	0

(i) **One** of the bits has been transmitted incorrectly.

Write the byte number and column number of this bit:

Byte number

Column number

[2]

(ii) Explain how you arrived at your answer for **part (b)(i)**.

.....
.....
.....
.....[2]

(c) Give the denary (base 10) value of the byte: **1 0 1 1 1 1 1 0**

.....
.....[1]

(d) A parity check may not identify that a bit has been transmitted incorrectly.

Describe **one** situation in which this could occur.

.....
.....
.....[1]

- 6 A gas fire has a safety circuit made up of logic gates. It generates an alarm ($X = 1$) in response to certain conditions.

Input	Description	Binary value	Conditions
G	gas pressure	1	gas pressure is correct
		0	gas pressure is too high
C	carbon monoxide level	1	carbon monoxide level is correct
		0	carbon monoxide level is too high
L	gas leak detection	1	no gas leak is detected
		0	gas leak is detected


The output $X = 1$ is generated under the following conditions:

gas pressure is correct **AND** carbon monoxide level is too high

OR

carbon monoxide level is correct **AND** gas leak is detected

- (a) Draw a logic circuit for this safety system.



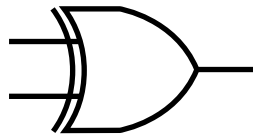
[5]

(b) Complete the truth table for the safety system.

G	C	L	Workspace	X
0	0	0		
0	0	1		
0	1	0		
0	1	1		
1	0	0		
1	0	1		
1	1	0		
1	1	1		

[4]

(c) Complete the truth table for the XOR gate:



A	B	C
0	0	
0	1	
1	0	
1	1	

[1]

8 Five computing terms are described below.

Write the name of the term being described.

Software that anyone can download for free from the Internet and then use without having to pay any fees. The usual copyright laws apply and a user license is important.

.....

Software that gives the user the chance to try it out free of charge before actually buying it. The software is subject to the usual copyright laws. As a rule, not all the features found in the full version are available at this stage.

.....

Software where users have freedom to run, copy, change and adapt it. This is an issue of liberty and not of price since the software guarantees freedom and the right to study and modify the software by having access to the actual source code.

.....

Set of principles that regulates the use of computers in everyday life. This covers intellectual property rights, privacy issues and the effects of computers on society in general.

.....

The taking of somebody's idea or software and claim that the idea or software code were created by the "taker".

.....

[5]

9 (a) Five statements about interpreters and compilers are shown in the table below.

Study each statement.

Tick (✓) to show whether the statement refers to an interpreter or to a compiler.

Statement	Interpreter	Compiler
creates an executable file that runs directly on the computer		
more likely to crash the computer since the machine code produced runs directly on the processor		
easier to debug since each line of code is analysed and checked before being executed		
slow speed of execution of program loops		
it is more difficult to modify the executable code, since it is in machine code format		

[5]

(b) State why a compiler or an interpreter is needed when running a high-level program on a computer.

.....

[1]

(c) Give **one** benefit of writing a program in a high-level language.

.....

[1]

(d) Give **one** benefit of writing a program in a low-level language.

.....

[1]

(e) Study the following three sections of code.

A: 1 0 1 0 1 1 0 1
 1 1 0 0 1 1 1 0
 1 0 1 1 0 1 1 1

B: LDA X
 INC X
 STA Y

C: FOR x ← 1 TO 10
 READ n
 ENDFOR

Identify, using the letters A, B or C, which of the above codes is an example of assembly code, high-level language code or machine code:

Assembly code

High-level language code

Machine code

[2]

10 Letters from the alphabet are represented in a computer by the following denary (base 10) values:

- A = 97
- G = 103
- I = 105
- L = 108
- N = 110

The word "ALIGN" is stored as: 97 108 105 103 110

(a) Convert each of the five values to binary. The first one has been done for you.

Letter	Denary value							
A (97):	0	1	1	0	0	0	0	1
L (108):								
I (105):								
G (103):								
N (110):								

[2]

(b) An encryption system works by shifting the binary value for a letter one place to the left. "A" then becomes:

1	1	0	0	0	0	1	0
---	---	---	---	---	---	---	---

This binary value is then converted to hexadecimal; the hexadecimal value for "A" will be:

C 2

For the two letters "L" and "G", shift the binary values one place to the left and convert these values into hexadecimal:

									hexadecimal
L:								
G:								

[4]

BLANK PAGE

Permission to reproduce items where third-party owned material protected by copyright is included has been sought and cleared where possible. Every reasonable effort has been made by the publisher (UCLES) to trace copyright holders, but if any items requiring clearance have unwittingly been included, the publisher will be pleased to make amends at the earliest possible opportunity.

To avoid the issue of disclosure of answer-related information to candidates, all copyright acknowledgements are reproduced online in the Cambridge International Examinations Copyright Acknowledgements Booklet. This is produced for each series of examinations and is freely available to download at www.cie.org.uk after the live examination series.

Cambridge International Examinations is part of the Cambridge Assessment Group. Cambridge Assessment is the brand name of University of Cambridge Local Examinations Syndicate (UCLES), which is itself a department of the University of Cambridge.